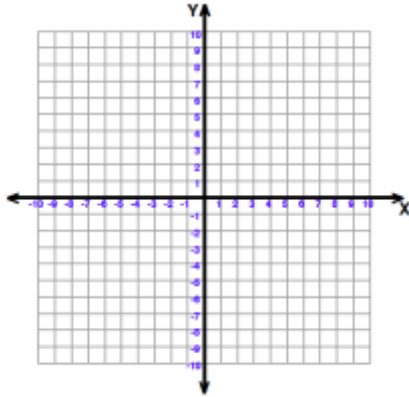


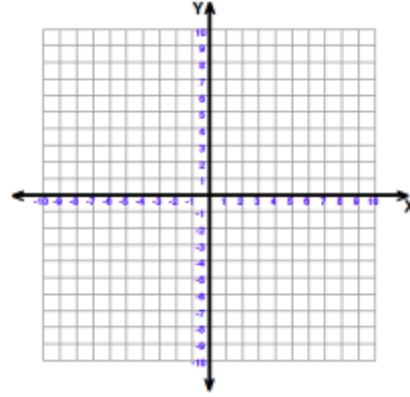
# Slope of a Line (Similarities and Differences)

Sketch an example for each graph and explain what is happening for each one and how you can remember if the slope of the graph is positive, negative, zero, or undefined.

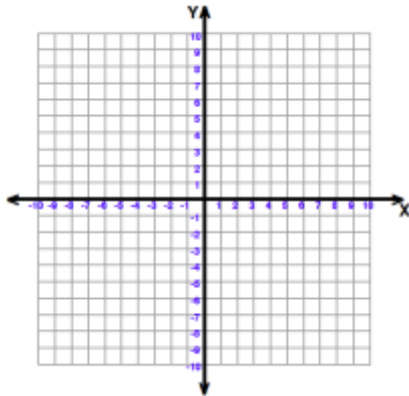
Positive Slope



Negative Slope



No or Zero Slope



Undefined Slope

