

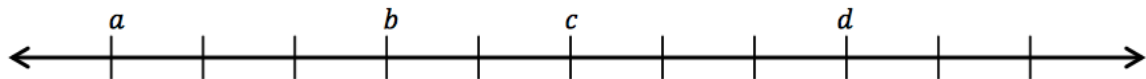
Positive and Negative Numbers

Name: _____

Opposite Direction and Value

Block: _____

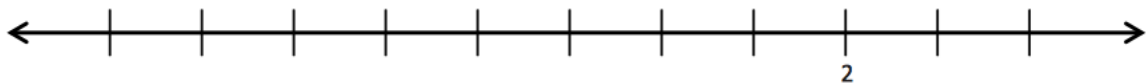
If zero lies between a and d , give one set of possible values for a , b , c , and d .



Below is a list of numbers in order from least to greatest. Use what you know about the number line to complete the list of numbers by filling in the blanks with the missing numbers.

$-6, -5, \underline{\hspace{1cm}}, -3, -2, -1, \underline{\hspace{1cm}}, 1, 2, \underline{\hspace{1cm}}, 4, \underline{\hspace{1cm}}, 6$

Complete the number line scale. Explain and show how to find 2 and the opposite of 2 on a number line.



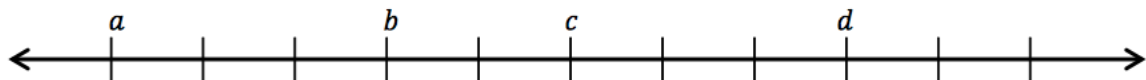
Positive and Negative Numbers

Name: _____

Opposite Direction and Value

Block: _____

If zero lies between a and d , give one set of possible values for a , b , c , and d .



Below is a list of numbers in order from least to greatest. Use what you know about the number line to complete the list of numbers by filling in the blanks with the missing numbers.

$-6, -5, \underline{\hspace{1cm}}, -3, -2, -1, \underline{\hspace{1cm}}, 1, 2, \underline{\hspace{1cm}}, 4, \underline{\hspace{1cm}}, 6$

Complete the number line scale. Explain and show how to find 2 and the opposite of 2 on a number line.

